

Franklin Township School Summer Reinforcement Packet Students Entering Second Grade

Your first grader had a busy year learning many new skills. Mastery of all these skills is important to develop a solid foundation. Next year's second grade program will continue to build on these first grade skills, so time spent learning and reviewing these concepts will be very beneficial to your child.

This packet contains many different reading, writing, and mathematics activities. Over the summer please set aside time for your child to work on these skills to ensure continued progress in second grade.

When your child returns to school in September, please return the completed packet, along with the reading activities, to their second grade teacher on the first day of school. Their packet completion will be documented and they will receive credit for their work.

Please know how much your effort and support has been appreciated. When parents and teachers work together children thrive.

We wish you a happy and safe summer.

Regards,

Ms. Donna Browning

Mrs. Trina Lahman

Excellent websites for fun learning and reinforcement of math skills:

www.wildmath.com - Select "Play the game". Select addition or subtraction and grade. You can race to beat your time.

www.aplusmath.com - Go under "Flashcards" or "Game Room" on the left side of the screen. They can practice adding and subtracting.

www.mathisfun.com - Select Money then select Money Master, click on the US flag, select simple. Or you can select numbers then Math Trainer for adding and subtracting. Back at home screen select games and pick a game to play.

www.funbrain.com - Lots of fun games to choose from.

www.illuminations.nctm.org - Select activities then select grade level. Click on Search.

www.eduplace.com - Select your state – "New Jersey: press submit. Select the student tab, then click on the "mathematics" rectangle. Click in the book "Houghton Mifflin Math". Click on "Grade 1". Select any games. Extra Help and Extra Practice is good, also eGames.

www.aaamath.com - At the top pick "First" or "Second" for a challenge. Choose any of the activities such as, adding or subtracting, then select "play" option toward the top of the screen. 20 Questions and countdown games are good ones.

Other games and activities you can play:




- Number Dot to Dot books or coloring books with addition/subtraction problems to color by.
- Write the numbers 1 – 50 or to 100 on index cards or pieces of paper. Put one number on each card. You can play war. Divide cards up evening among all players. Cards are face down. Each player turns over their top card. Highest number takes all the cards. Keep playing until you are through all cards. Person with the most cards wins. Have all cards face down. Select 4 to 5 cards and put them in order from least to greatest or you can do largest to smallest.
- Using sidewalk chalk, have them write the numbers counting backwards from 20.
- Play a game while in the car or waiting in line.
What number comes before 60? What number comes after 29?
50 is one more than ____? (49) 39 is one less than ____? (40)

What comes between 62 and 64?

- Practice counting by 5's, 10's, or 2's. Have them write it in sidewalk chalk. Counting by 2's how many steps are from your bedroom to the bathroom? Etc...
- Take a deck of cards and remove the face cards (kings, queens, jacks). Aces are one. Divide the cards evenly among 2 players. Each player flips over a card. The first one to add the 2 numbers correctly wins the cards. After going through the pile of cards, the player with the most cards wins. You can do a subtraction version also.

SUMMER PACKET

I'M GETTING READY FOR 2ND GRADE!

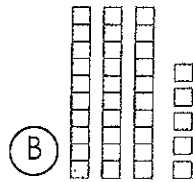
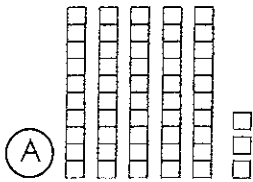


Name: _____

1 Write the missing numbers.

21 ____ 23 24 25 ____ 27

2 Which set shows 53?



4 Draw a line from the coin to its matching value.



• 10¢



• 1¢



• 5¢

3 $13 + 4 =$ ____ $10 + 9 =$ ____

5 If today is Wednesday, what day was it yesterday?

(A) Tuesday

(B) Thursday

6 Circle all the pictures that begin with *p*.



8 Mark the sight word that completes the sentence.

The ____ clouds are high in the sky.

(A) funny

(B) white

(C) like

7 Mark the word that has the same beginning sound as *mouse*.

(A) make

(B) sand

(C) nose

9 Mark the set of words that are in ABC order.

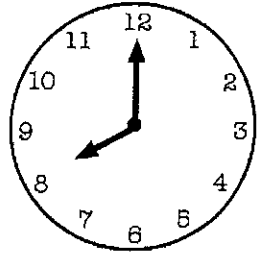
(A) bell, farm, water, table

(B) farm, table, water, bell

(C) bell, farm, table, water

10 Rewrite the sentence with correct capitalization, spelling and punctuation.
it is time for shcool

1 Write the time.

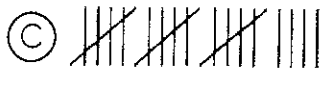




4 Draw a triangle.

2 8 tens, 7 ones = _____

6 tens, 2 ones = _____

5 Which set of tally marks show 24?



3

10	8	12
- 6	- 3	- 9
_____	_____	_____

6 Circle all the pictures that begin with *d*.



8 Mark the sight word that completes the sentence.

The kids ___ new books.

- (A) want (B) goes (C) went

7 Mark the word that has the same beginning sound as *chin*.

- (A) change (B) patch (C) cake

9 Write the words in ABC order.

goat whale monkey bear


1. _____
2. _____
3. _____
4. _____

10 Rewrite the sentence with correct capitalization, spelling and punctuation.
when are we going to the store.


1 What comes next?



4 Which object is the longest?



2 Write >, < or = in the circle.



3 $6 + 9 =$ _____ $8 - 3 =$ _____


5 There are 9 boys and 7 girls in the class. How many children are there all together in the class?

(A) $9 + 7 = 16$ children

(B) $9 + 7 = 15$ children

(C) $9 - 7 = 2$ children

6 Circle all the pictures that begin with *tr*.



8 Mark the sight word that completes the sentence.

_____ are you reading?

(A) Who (B) Want (C) What

9 The book is fiction.



(A) true

(B) false

10 Rewrite the sentence with correct capitalization, spelling and punctuation.

Sam has soccer evry tuesday

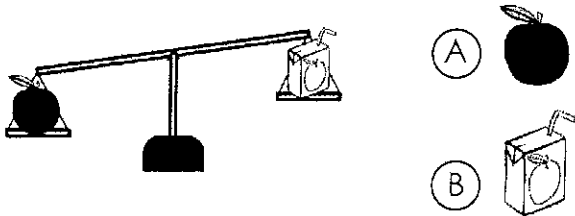
1 Find the pattern. Write the missing numbers.

6 8 10 _____ 14 _____ 18 20

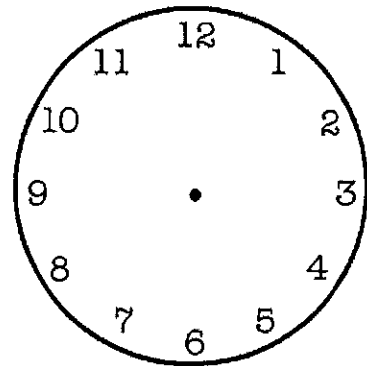
4 Write how much money in all.



2 Which object weighs less?

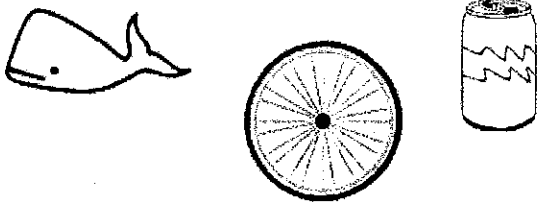


5 Draw clock hands to show 3:00.



3 $9 - 2 =$ _____ $7 + 5 =$ _____

6 Circle all the pictures that begin with *wh*.



8 Mark the sight word that completes the sentence.

I watched the movie _____.

- (A) one (B) once (C) good

7 Mark the word that has the same beginning sound as *hop*.

- (A) pin (B) hand (C) pot

9 Mark the noun that completes the sentence.

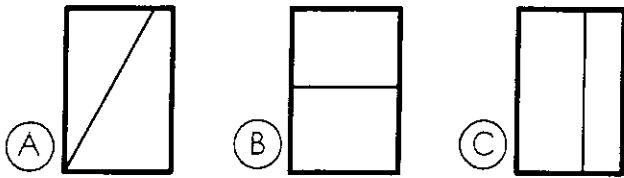
The _____ runs really fast.

- (A) house (B) pencil (C) girl

10 Rewrite the sentence with correct capitalization, spelling and punctuation.

The bus takes matt to work?

1 Which shape shows equal parts?



2 If tomorrow is Sunday, then today must be ____.

- (A) Monday (B) Saturday

3

$\begin{array}{r} 11 \\ + 3 \\ \hline \end{array}$	$\begin{array}{r} 15 \\ - 9 \\ \hline \end{array}$	$\begin{array}{r} 7 \\ + 8 \\ \hline \end{array}$
--	--	---

4 Which real-life container holds the most liquid?



5 There are 13 ducks in the pond. If 6 ducks fly away, how many ducks are left in the pond?

$$\underline{\hspace{2cm}} \bigcirc \underline{\hspace{2cm}} = \underline{\hspace{2cm}}$$

_____ ducks

Read the passage. Answer the questions.

Dogs for Pets

Dogs can make good pets if you take care of them. They need food and water. They need time to play and exercise. They also need a safe and clean place to live. Taking good care of a dog will make it a happy pet.

6 What is the main idea?

- (A) Dogs like to play.
 (B) Dogs need food and water.
 (C) Dogs need a lot of care.

7 What do dogs like to do?

- (A) play
 (B) run away
 (C) help clean

8 What do dogs need to live?

- (A) toys
 (B) food and water
 (C) a bed

9 Why do you need to take good care of your dog?

- (A) The dog will be happy.
 (B) The dog will never leave you.
 (C) The dog will always be good.

10 Which word belongs in the blank?
 Dogs need _____ play.

- (A) time
 (B) go
 (C) to

1 Find the pattern.
Write the missing numbers.

10 15 ___ 25 ___ 35 40

2 Tom has 4 shells, Angie has 7 shells and Luis has 5 shells. How many shells do they have all together?


- (A) 11 shells (B) 16 shells

3
$$\begin{array}{r} 12 \\ + 3 \\ \hline \end{array}$$

$$\begin{array}{r} 10 \\ + 10 \\ \hline \end{array}$$

$$\begin{array}{r} 13 \\ - 9 \\ \hline \end{array}$$

4 Write the time on the digital clock that the analog clock shows.




5 Write the number of counters the ten-frames show.



- (A) 15 (B) 17 (C) 20

6 Circle all the pictures that end with *g*.



8 Mark the sight word that completes the sentence.

Do you ___ the way home?

- (A) walk (B) know (C) goes

7 Mark the word that has the same ending sound as *rush*.

- (A) ship (B) hatch (C) dish

9 What does an author do?

- (A) writes the words in books
(B) draws the pictures in books
(C) prints the pages in books

10 Rewrite the sentence with correct capitalization, spelling and punctuation.
how many cakes do you need.

1 Write how much money in all.



4 I have 4 sides. All of my sides are the same length. What shape am I?



(A)



(B)



(C)

2 Draw the tally marks to show 17.

5 What's the missing number?

$$\square + 5 = 9$$

3 $2 + 4 + 1 = \underline{\quad}$

6 Circle all the pictures that end with *n*.



8 Mark the sight word that completes the sentence.

The boys are ___ there.

(A) over

(B) even

(C) other

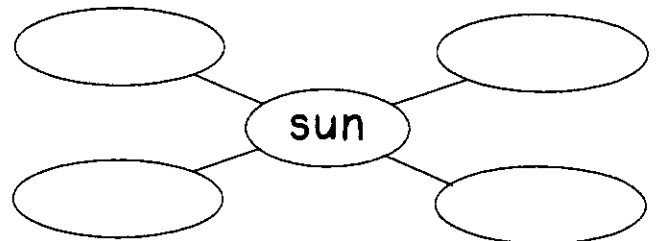
7 Mark the word that has the same ending sound as *note*.

(A) pat

(B) hope

(C) nice

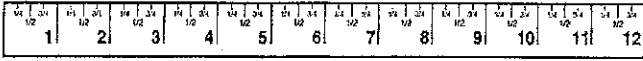
9 Write words that tell about the sun.




10 Rewrite the sentence with correct capitalization, spelling and punctuation.

I can't here you

1 How many inches long is the phone?



2 Write >, < or = in the circle.



3 $18 - 9 = \underline{\quad}$ $20 - 10 = \underline{\quad}$

6 Circle all the pictures that end with *tch*.



7 Mark the word that has the same ending sound as *pick*.


- (A) dice (B) back (C) coat

10 Rewrite the sentence with correct capitalization, spelling and punctuation.
what time is it

4 Louisa sells 8 boxes of cookies. Matt sells 5 boxes of cookies. How many boxes of cookies do they sell in all?

_____ boxes

5 Draw a line of symmetry for the shape below.



8 Mark the sight word that completes the sentence.

The dogs ___ barking all night.

- (A) where (B) were (C) can

9 Is the sentence below fiction or non-fiction?

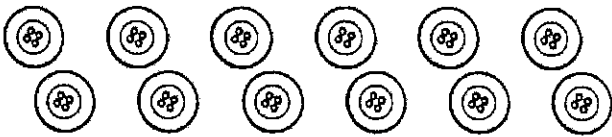
The frog hops away from the pond.

- (A) fiction (B) non-fiction

1 Micah goes to his piano lesson at 9:00. If his lesson is one hour long, what time will he be done?

- (A) 8:00 (B) 9:30 (C) 10:00

2 Skip count to find how many buttons in all.



_____ buttons

3 $3 + 4 = \underline{\quad}$ $9 + 5 = \underline{\quad}$

4 Which object has the shape of a cube?



(A)




(B)




(C)

5 Which bottle holds the least?



(A)



(B)

6 Circle all the pictures that end with *th*.



8 Mark the sight word that completes the sentence.

Luis _____ to the park.

- (A) went (B) go (C) want

7 Mark the word that has the same ending sound as *happy*.

- (A) play (B) boy (C) sunny

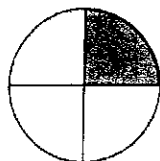
9 Mark the verb that completes the sentence.

The shark _____ in the ocean.

- (A) walks (B) swims (C) runs

10 Rewrite the sentence with correct capitalization, spelling and punctuation.
my birthday is in august.

1 What is the fraction for the shaded part?

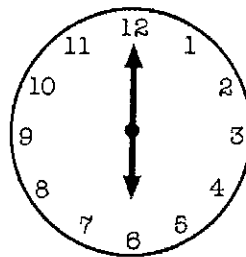


(A) $\frac{1}{3}$

(B) $\frac{1}{4}$

(C) $\frac{3}{4}$

4 Write the time.




2 Write how much money in all.



= _____

5 How many marbles are there?



_____ marbles

3

11	6	17
- 9	+ 7	- 6
_____	_____	_____

Read the passage. Answer the questions.

Ted Bakes

Ted wants to make a cake for Mom while she is at work. He asks Dad to help. Ted and Dad wash their hands. Then they mix the cake. Last they bake the cake. Mom comes home and looks very surprised. Ted says, "We made it for you!" Ted feels great when Mom gives him a huge hug.

6 What is the setting of the story?

(A) in the morning

(B) at home

(C) at the park

7 How many characters are there?

(A) one

(B) two

(C) three

8 What do Ted and Dad do first?

(A) mix the cake

(B) bake the cake

(C) wash their hands

9 In what genre is this story?

(A) realistic fiction

(B) fantasy

(C) informational text

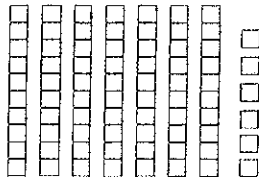
10 What will Ted, Dad and Mom do next?

(A) go to sleep

(B) play hide and seek

(C) eat the cake

1 How many blocks are there in all?



_____ blocks

2 Which shape comes next?



3 $15 + 2 = \underline{\quad}$ $12 - 8 = \underline{\quad}$

4

Favorite Fruit						
	Apple					
	Banana					
	Orange					

Which fruit was the most popular?

How many people chose bananas?

_____ people

5 Circle the odd number.


38 25 14

Look at the homophones. Mark the word that matches the picture.



(A) eight

(B) ate



(A) son

(B) sun

8 Mark the sight word that completes the sentence.

Will you _____ sit in your chair?

(A) they (B) pretty (C) please

9 The person that draws the pictures in a story is called the _____.

- (A) author
- (B) illustrator
- (C) uncle

10 Rewrite the sentence with correct capitalization, spelling and punctuation.

She can't see the board

1 Write the numbers in order from least to greatest.




2 Luke has 3 pens. He buys 7 more. How many pens does he have now?


_____ pens

3	$\begin{array}{r} 4 \\ + 4 \\ \hline \end{array}$	$\begin{array}{r} 9 \\ + 9 \\ \hline \end{array}$	$\begin{array}{r} 7 \\ + 7 \\ \hline \end{array}$
---	---	---	---

4 Leah reads eight books. Allen reads nine books. Draw the number of books each person reads.



Leah



Allen


Who reads fewer books? _____

5 Find the pattern. Write the missing numbers.

10 20 _____ 40 _____ 60 70

Look at the homophones. Mark the word that matches the picture.

6



- (A) male
- (B) mail

7




- (A) I
- (B) eye

8 Mark the sight word that completes the sentence.

_____ child in our class gets to play.

- (A) Every
- (B) Ever
- (C) Even

9 The book is fiction.

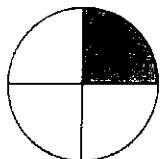


- (A) true
- (B) false


10 Rewrite the sentence with correct capitalization, spelling and punctuation.

Emily play outside?


1 Which shape shows one half?



(A)



(B)

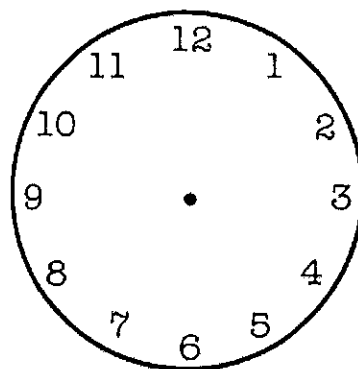


(C)

2 Asha has 2 dimes, 3 nickels and 1 penny. How much money does she have in all?

<p>3</p> $\begin{array}{r} 10 \\ - 5 \\ \hline \end{array}$	$\begin{array}{r} 9 \\ - 9 \\ \hline \end{array}$	$\begin{array}{r} 16 \\ - 8 \\ \hline \end{array}$
---	---	--

4 Draw the clock hands to show 1:30.




5 Write the number for each number word.

eighteen: _____ thirty: _____

twenty-two: _____ fifty-one: _____

Look at the homophones. Mark the word that matches the picture.

6



(A) meet

(B) meat

7



(A) deer

(B) dear

8 Mark the sight word that completes the sentence.

Kenny is _____ Minnesota.

(A) four

(B) go

(C) from

9 Write the words in ABC order.

pear berry grape orange

1. _____

2. _____

3. _____

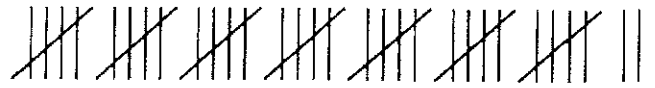
4. _____

10 Rewrite the sentence with correct capitalization, spelling and punctuation.
watch out four the car!

1 What's the missing number?

+ 6 = 12

4 Write the number of tally marks.



_____ tally marks


2 My number is between 16 and 20.
My number is even. What number am I?

5 Draw a shape with zero sides.

3 5 + 2 + 8 = _____

Look at the homophones. Mark the word that matches the picture.

6



- (A) right
- (B) write

8 Mark the sight word that completes the sentence.

We can't _____ the music.

- (A) here
- (B) her
- (C) hear

7



- (A) would
- (B) wood

9 Mark the verb that completes the sentence.

The kite _____ high in the sky.


- (A) flies
- (B) blue
- (C) little

10 Rewrite the sentence with correct capitalization, spelling and punctuation.
do you want to play.

- 1 Write $>$, $<$ or $=$ in the circle.

$$3 + 5 \bigcirc 5 + 3$$

- 2 Write the number of flat surfaces on a cylinder.



_____ flat surfaces

- 3 $11 - 7 =$ _____ $9 + 8 =$ _____

- 4 Write how much money in all.



- 5 Write a story problem for $7 - 5 = 2$.

Read the passage. Answer the questions.

There are many kinds of farms. Some farms have cows. Many people drink the milk that cows make. Corn also comes from farms. Farmers plant the corn. Then they water the corn until it grows tall. Trucks take the milk and the corn to the stores.

- 6 What would be a good title?

- (A) Corn
(B) Farms
(C) Milk

- 7 Why do farms produce milk?

- (A) for people to drink
(B) for fun
(C) to give away for free

- 8 How does corn get to the stores?

- (A) farmers bring it
(B) by truck
(C) by airplane

- 9 What does the farmer have to do next after planting the corn?

- (A) nothing
(B) bring it to the store
(C) water it

- 10 What is the main idea?

- (A) Farmers are hard workers.
(B) There are many kinds of farms.
(C) Milk and corn go to the stores.

1 Which set repeats the pattern?



4 About how long is this crayon?



(A) 3 inches

(B) 3 feet

2 Equal means the ____.

(A) most (B) least (C) same

5 What's the missing number?

$$\square - 4 = 6$$

3 $11 + 3 = \underline{\quad}$ $10 - 7 = \underline{\quad}$

Name each picture. Then write the compound word the two words make together.



_____ + _____ = _____



_____ + _____ = _____

8 Mark the sight word that completes the sentence.

You need to drink ____ water.

(A) same (B) some (C) for

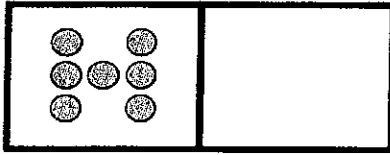
9 Mark the correctly spelled word to complete the sentence.

How ____ boys are in your class?

(A) many (B) meny (C) mony


10 Rewrite the sentence with correct capitalization, spelling and punctuation.
do yor Homework every night.

1 Draw the missing part of 10. Write the missing numbers.



_____ _____
part I know missing part

4 How many counters are there?



- (A) 29
- (B) 54
- (C) 60

2 Write 10 more than 56: _____

5 Write how much money in all.

$$\begin{array}{r} 19 \\ - 1 \\ \hline \end{array} \qquad \begin{array}{r} 8 \\ + 7 \\ \hline \end{array} \qquad \begin{array}{r} 14 \\ + 3 \\ \hline \end{array}$$





Name each picture. Then write the compound word the two words make together.

8 Mark the sight word that completes the sentence.

It _____ started raining.


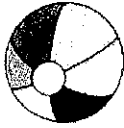
- (A) just
- (B) have
- (C) will

6  +  = _____

9 Read the list of words. Find the group where the list of words belongs.

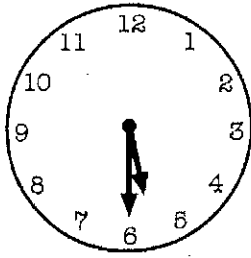
pizza, apple, carrot, bread

- (A) fruit
- (B) plants
- (C) food

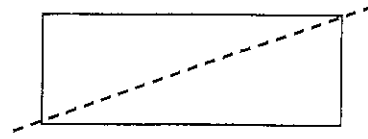
7  +  = _____

10 Rewrite the sentence with correct capitalization, spelling and punctuation.
is it raining outside

1 Write the time.



4 The shape below shows a line of symmetry.



(A) True

(B) False


2 Julian sees 23 birds. Calla sees 32 birds. Who sees more birds?

5 Lisa has 7 stickers, Tyrone has 4 stickers and Kayla 5 stickers. How many stickers do they have in all?

_____ stickers

3	20	12	9
-	0	- 2	+ 7
_____	_____	_____	_____

Name each picture. Then write the compound word the two words make together.



_____ + _____ = _____

8 Mark the sight word that completes the sentence.

Remember to ___ the umbrella.

(A) talk

(B) take

(C) ride



_____ + _____ = _____

9 Read the first part of the sentence. Mark the part that completes the sentence.

Let's go for _____.

(A) bike ride home.

(B) a walk in the park.

10 Rewrite the sentence with correct capitalization, spelling and punctuation.

She doesn't know how to play

1 Find the pattern. Write the missing numbers.

10 20 _____ 40 _____ 60 70

2 What's the name of the shape?



- (A) rectangular prism
- (B) cube
- (C) cylinder

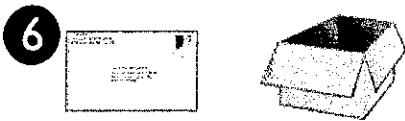
3 $8 + 3 =$ _____ $9 - 7 =$ _____

4 Write how much money in all.



5 Write an odd number less than 10.

Name each picture. Then write the compound word the two words make together.



_____ + _____ = _____



_____ + _____ = _____

8 Mark the sight word that completes the sentence.

Pete is _____ new cat.

- (A) our
- (B) hour
- (C) are

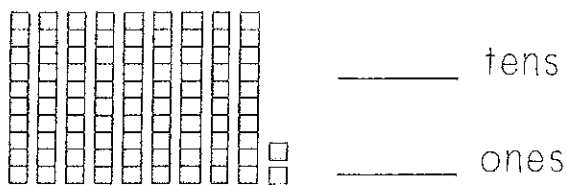
9 Mark the noun in the sentence.

The fish is swimming.

- (A) The
- (B) fish
- (C) swimming

10 Rewrite the sentence with correct capitalization, spelling and punctuation.
eat all of your Carrots.

- 1 Write the number of blocks as tens and ones.



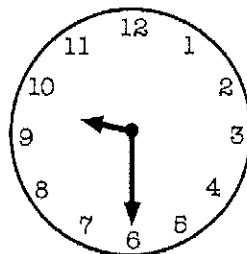
- 2 Circle the smallest number.

87 46 78

3

13	11	8
+ 3	- 4	+ 6
_____	_____	_____

- 4 Which clock shows the same time?



- 5 Adam has 12 pennies. He loses 5 of his pennies. How many pennies does he have now?

_____ pennies

Read the passage. Answer the questions.

Annie's room was a disaster. There were toys on the floor, books on the bed and clothes on the desk. Her mom said, "Your room is a mess! You have to clean it now or you won't get to play." Annie spent two hours picking up her toys, books and clothes and putting them away. When Annie's mom came back, she smiled and said, "Your room looks much better!"

- 6 Who is the main character?
- (A) Annie
(B) Mom
(C) the bedroom
- 7 What is the setting?
- (A) the kitchen
(B) at school
(C) Annie's bedroom
- 8 What is Annie's problem?
- (A) Annie has a lot of homework.
(B) Annie's room is too messy.
(C) Annie's mom is too busy.
- 9 How does Annie fix the problem?
- (A) Annie's friend helps her.
(B) Annie's mom cleans her room.
(C) Annie puts her stuff away.
- 10 What is this story mostly about?
- (A) Annie cleans her room.
(B) Annie puts her clothes away.
(C) Annie's mom is mad.



1 Write the first month of the year on the line.

2 Write the numbers in order from greatest to least.

74 46 51

3 $4 + 9 + 5 =$ _____

4 Circle the heaviest item.



5 You buy a dozen eggs. You use 4 of the eggs. How many eggs do you have left?

_____ eggs

6 Draw a line from each word to its synonym.

tidy •	• clean
kind •	• little
small •	• nice

8 Mark the sight word that completes the sentence.

Kate ___ like to go for a walk.

(A) went (B) goes (C) would

7 Mark the correct punctuation for the sentence.

We take the bus to school ___

(A) . (B) ? (C) !

9 Mark the sentence that is written with correct capitalization.

- (A) We went to the mall of America.
- (B) We went to the Mall of America.
- (C) we went to the Mall of America.


10 Rewrite the sentence with correct capitalization, spelling and punctuation.

Stacy lives on Main street?

1 Write how much money in all.



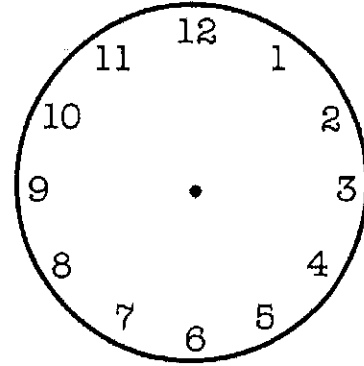
2 What is the fraction for the shaded part?



- (A) $\frac{1}{3}$ (B) $\frac{1}{4}$ (C) $\frac{3}{4}$

3 $9 + 4 =$ _____ $15 - 7 =$ _____

4 Shane leaves for school at 7:30. It takes 30 minutes to get to school. Draw the clock hands to show the time Shane will arrive to school.



5 What's the missing number?

$$13 = \square + 6$$

6 Draw a line from each word to its synonym.

big •	• glad
happy •	• yell
shout •	• large

8 Mark the sight word that completes the sentence.

_____ are going on a field trip.

- (A) They (B) I (C) He

7 Mark the correct punctuation for the sentence.

What is the date today _____

- (A) . (B) ? (C) !

9 Mark the set of words that are in ABC order.

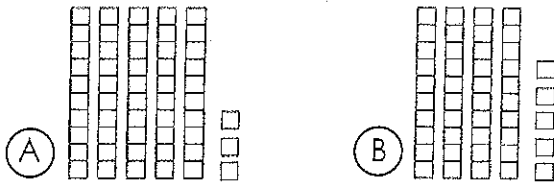
- (A) green, blue, red, yellow
(B) blue, green, yellow, red
(C) blue, green, red, yellow

10 Rewrite the sentence with correct capitalization, spelling and punctuation.
como Zoo has lots of animals

1 An object that is divided into thirds has ___ equal parts.

- (A) 2 (B) 3 (C) 4

2 Which set is less?



3

$\begin{array}{r} 14 \\ - 6 \\ \hline \end{array}$	$\begin{array}{r} 16 \\ + 4 \\ \hline \end{array}$	$\begin{array}{r} 17 \\ - 8 \\ \hline \end{array}$
--	--	--

4 Find the pattern. Write the missing numbers.

3 | ___ 29 | ___ 27 26 | ___

5 Belinda has 18¢. She spends 6¢ at the store. How much money does she have left?



6 Read the sentence. Mark the synonym for the underlined word.

The girls had a fantastic day.

- (A) bad (B) great (C) slow

8 Mark the sight word that completes the sentence.

Joe needs to ___ his bed.

- (A) eat (B) make (C) walk

7 Mark the correct punctuation for the sentence.

Hurray, we won the game ___

- (A) . (B) ? (C) !


9 Mark the correctly spelled word to complete the sentence.

Do you ___ my pencil?

- (A) hav (B) have (C) hove

10 Rewrite the sentence with correct capitalization, spelling and punctuation.
will you go with josh?

1 Write the number of flat surfaces and vertices for the solid figure.



_____ flat surfaces


_____ vertices

2 Omar has 6 toy cars. Pang has 8 toy cars. How many more toy cars does Pang have than Omar?

_____ toy cars

3 $8 - 5 = \underline{\quad}$ $6 + 5 = \underline{\quad}$

4 Jim sees 4 lions, 7 monkeys and 2 seals at the zoo. Fill in the bar graph to show the number of animals he sees.



5 Write >, < or = in the circle.

2 cups ○ 1 pint

6 Read the sentence. Mark the synonym for the underlined word.

Shut the door when you leave.

- (A) Open (B) Have (C) Close

8 Mark the sight word that completes the sentence.

Keira will _____ the dog a bone.

- (A) giving (B) take (C) give

7 Mark the correct punctuation for the sentence.

How tall is your dad _____

- (A) . (B) ? (C) !

9 Mark the verb in the sentence.

The bee flies back to its hive.

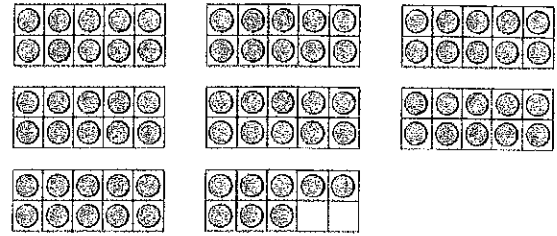
- (A) flies (B) hive (C) bee

10 Rewrite the sentence with correct capitalization, spelling and punctuation.

Nat needs two cup

1 Grace has 4 dimes, 2 nickels and 3 pennies in her pocket. How much money does she have in all?

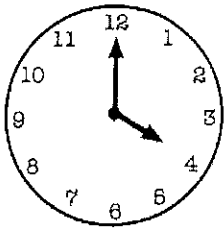
4 How many counters do the ten-frames show?



_____ counters

circle one: odd even

2 Write the time.



3	15	12	5
- 9	- 4	+ 6	
_____	_____	_____	

5 Circle the seventh letter.

A B C D E F G H I J

Read the passage. Answer the questions.

Frog Looks and Looks

Frog is sad because he lost his glasses. He looks under his bed. He looks in his desk. He looks everywhere but can't find them anywhere. Frog gets really tired and decides to go to bed. He goes to the bathroom to brush his teeth. He looks at himself in the mirror and laughs. His glasses are on top of his head!

6 Where does this story take place?

- (A) in the garden
- (B) in the classroom
- (C) in Frog's home

7 Why is Frog sad?

- (A) He can't find his glasses.
- (B) He reads a sad book.
- (C) He is really tired.

8 What does Frog do last?

- (A) brushes his teeth
- (B) looks under his bed
- (C) watches TV

9 Where does Frog find his glasses?

- (A) under his bed
- (B) in his desk
- (C) on top of his head

10 How do you know this story is fantasy?

- (A) The story is about a frog.
- (B) Frog brushes his teeth.
- (C) Frogs are animals.